



Solve each problem using a tape diagram.

Answers

- 1) Rachel, her brother and her sister pooled their money to buy a console and some games. Together they had \$630. Rachel gave  $\frac{1}{6}$  as much as her sister and her brother gave \$20 fewer than her sister. How much did Rachel contribute?
  
  
  
  
  
  
  
  
  
  
- 2) Amanda, Bianca and Cathy bake 260 muffins. Bianca bakes 3 times as many muffins as Cathy. Amanda bakes 20 fewer muffins than Bianca. How many muffins did Amanda bake?
  
  
  
  
  
  
  
  
  
  
- 3) Jerry earned \$270 mowing lawns over the summer. In July he earned 5 times as much as he did in August. And in June he earned 16 dollars fewer than in July. How much money did he earn in June?
  
  
  
  
  
  
  
  
  
  
- 4) Janet sent 254 text messages over the summer. In July she sent 6 times as many as she did in August. And in June she sent 19 fewer than in July. How many texts did she send in August?
  
  
  
  
  
  
  
  
  
  
- 5) A theater owner was looking at how many sodas they sold of different sizes in a day. Total they sold 704 sodas. They sold  $\frac{1}{8}$  as many small sodas as they did large sodas. And they sold 10 fewer medium sodas as they did large sodas. How many medium sodas did they sell?

1. \_\_\_\_\_

2. \_\_\_\_\_

3. \_\_\_\_\_

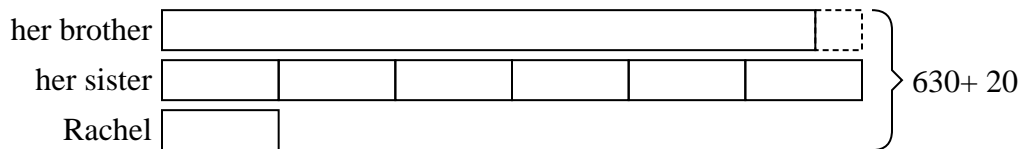
4. \_\_\_\_\_

5. \_\_\_\_\_




Solve each problem using a tape diagram.

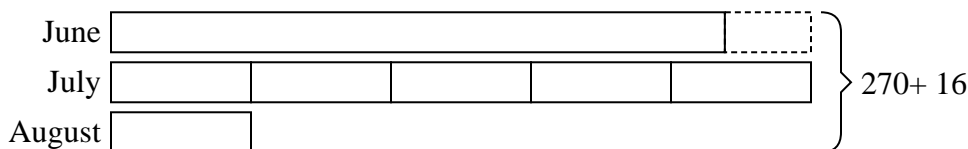
- 1) Rachel, her brother and her sister pooled their money to buy a console and some games. Together they had \$630. Rachel gave  $\frac{1}{6}$  as much as her sister and her brother gave \$20 fewer than her sister. How much did Rachel contribute?



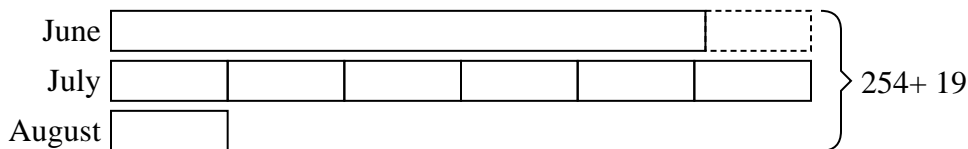
- 2) Amanda, Bianca and Cathy bake 260 muffins. Bianca bakes 3 times as many muffins as Cathy. Amanda bakes 20 fewer muffins than Bianca. How many muffins did Amanda bake?



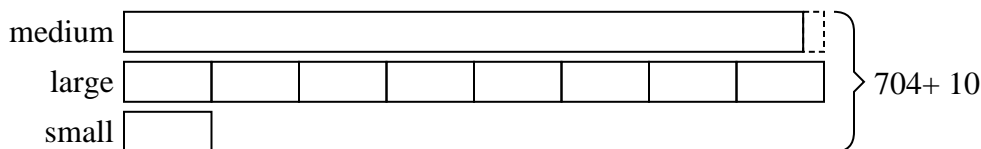
- 3) Jerry earned \$270 mowing lawns over the summer. In July he earned 5 times as much as he did in August. And in June he earned 16 dollars fewer than in July. How much money did he earn in June?



- 4) Janet sent 254 text messages over the summer. In July she sent 6 times as many as she did in August. And in June she sent 19 fewer than in July. How many texts did she send in August?



- 5) A theater owner was looking at how many sodas they sold of different sizes in a day. Total they sold 704 sodas. They sold  $\frac{1}{8}$  as many small sodas as they did large sodas. And they sold 10 fewer medium sodas as they did large sodas. How many medium sodas did they sell?



Answers

1. 50

2. 100

3. 114

4. 21

5. 326